

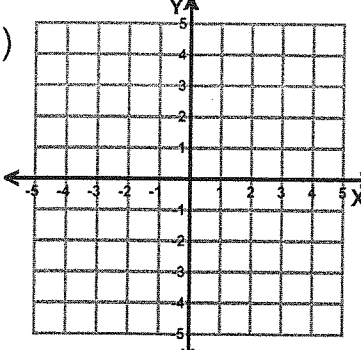
Name : _____

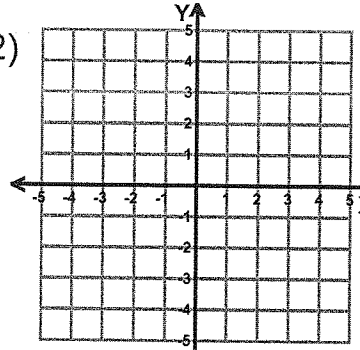
Score : HW 3

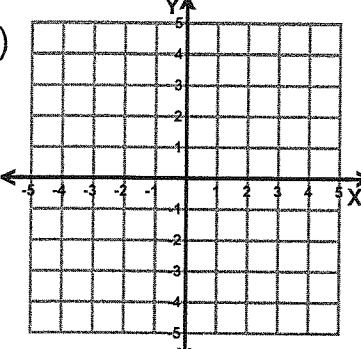
Teacher : _____

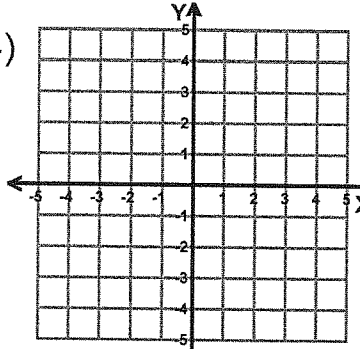
Date : _____

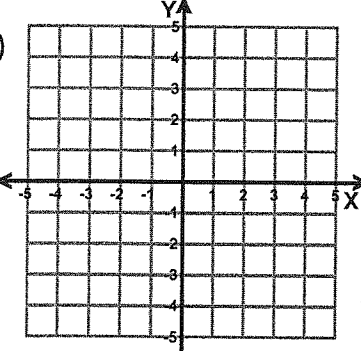
Sketch Each Line and Find the Slope and Y-intercept

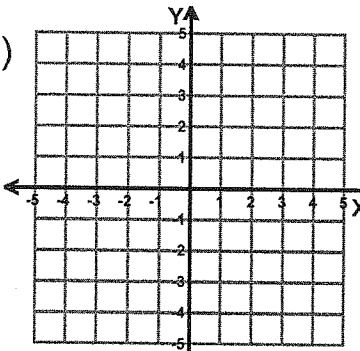
1)  equation $y = \frac{1}{2}x + 3$
slope (m) = _____
y-intercept = _____

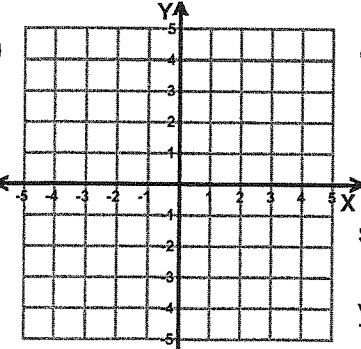
2)  equation $y = -\frac{4}{3}x + 1$
slope (m) = _____
y-intercept = _____

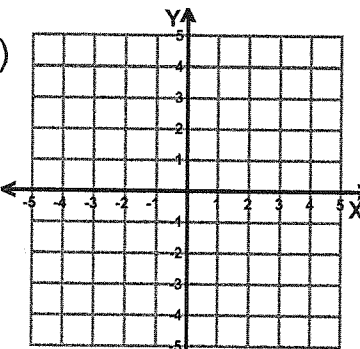
3)  equation $y = -\frac{3}{4}x + 4$
slope (m) = _____
y-intercept = _____

4)  equation $y = -2x + 2$
slope (m) = _____
y-intercept = _____

5)  equation $y = \frac{1}{3}x + 3$
slope (m) = _____
y-intercept = _____

6)  equation $y = 3x + 2$
slope (m) = _____
y-intercept = _____

7)  equation $y = \frac{1}{2}x - 1$
slope (m) = _____
y-intercept = _____

8)  equation $y = -\frac{2}{5}x - 2$
slope (m) = _____
y-intercept = _____

