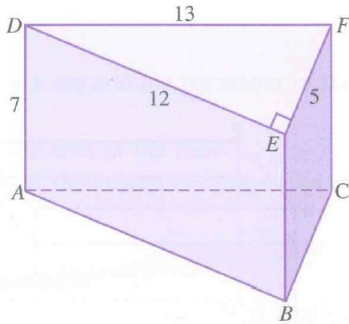


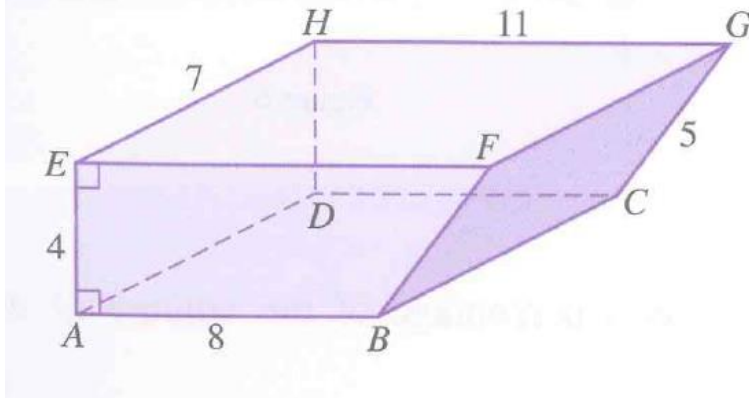
Please complete the following problems for homework. Check Mrs. Kent's website for due dates.
THERE MAY BE PROBLEMS ON THE BACK!

1. Use the image to answer the following questions.



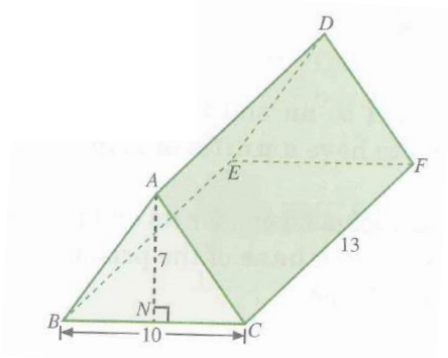
- What shape is the "Base"?
- What is the area of the "Base", B ?
- What is the height of the prism?
- What is the volume of the prism?
- What is the surface area of the prism?

2. Use the image to answer the following questions.



- What shape is the "Base"?
- What is the area of the "Base", B ?
- What is the height of the prism?
- What is the volume of the prism?
- What is the surface area of the prism?

3. Use the image to answer the following questions.



- What shape is the "Base"?
- What is the area of the "Base", B ?
- What is the height of the prism?
- What is the volume of the prism?
- What is the surface area of the prism?